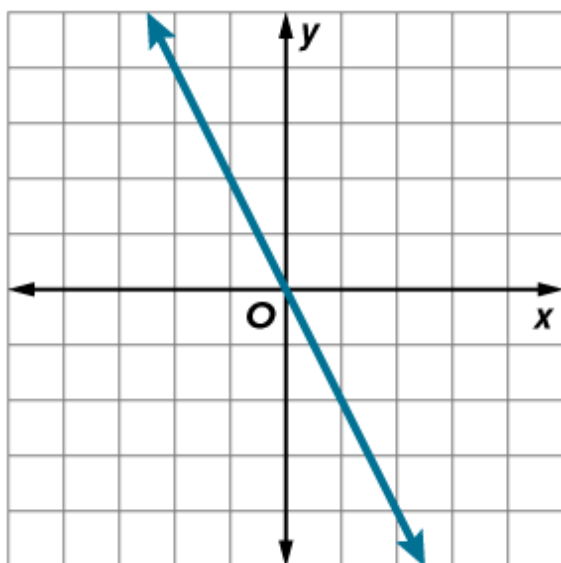


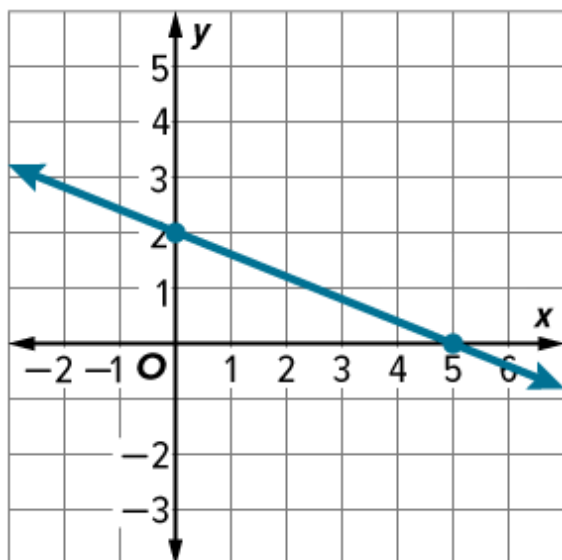
Answer Key

Practice • Sketching Graphs and Comparing Functions Form A

1)

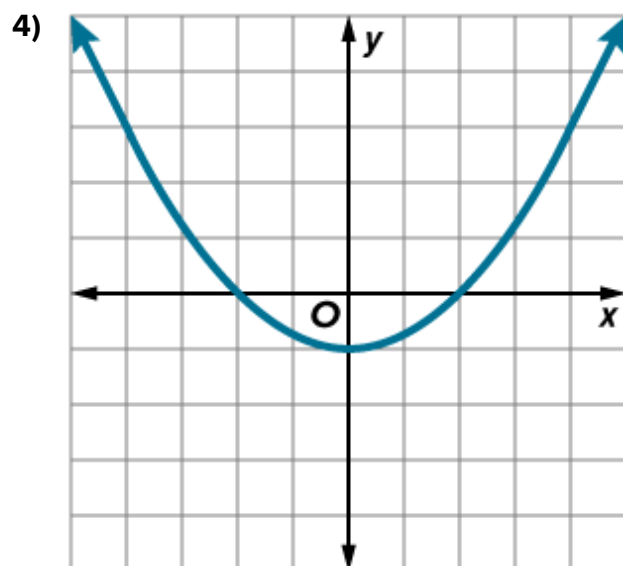
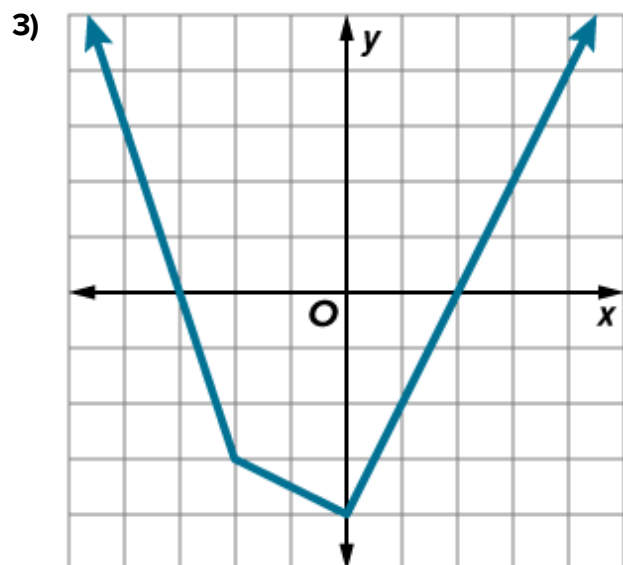


2)



Answer Key

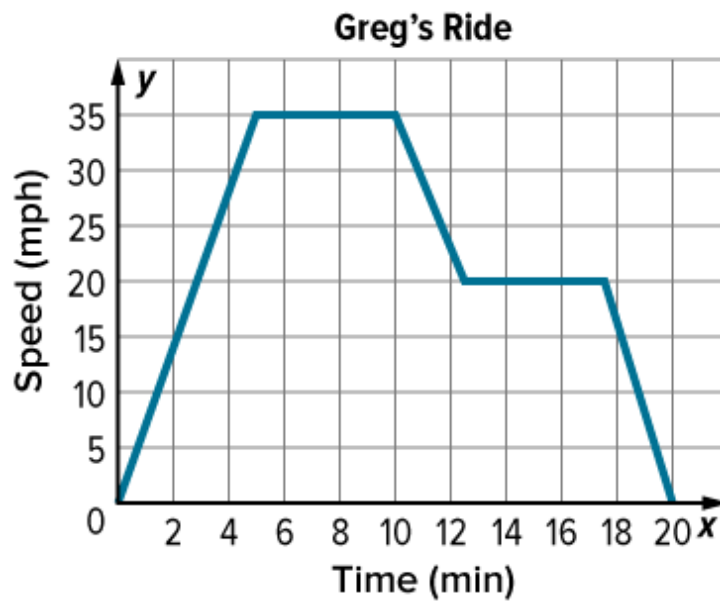
Practice • Sketching Graphs and Comparing Functions Form A



Answer Key

Practice • Sketching Graphs and Comparing Functions Form A

5)



6) -3
 -2
 greater than
 right than
 3
 -2
 greater than
 higher point
 1
 -1
 increasing
 decreasing
 greater than

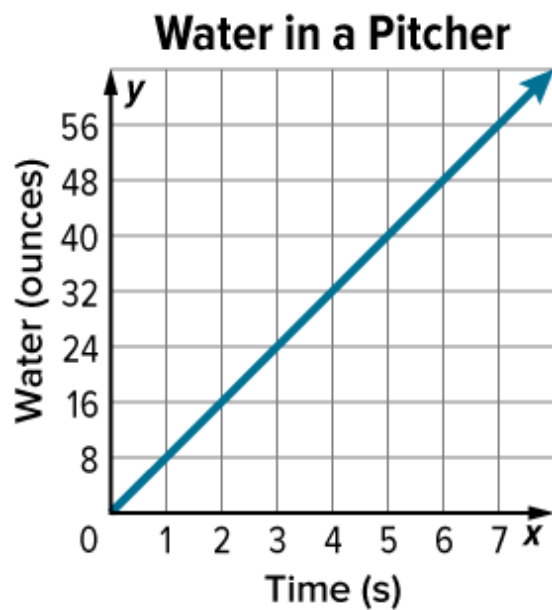
7) -1, 1, and 2
 more times
 less than
 higher point
 greater than
 same

8) less than
 more times
 less than
 higher point
 greater than
 has a relative maximum
 does not have a relative maximum
 $x \rightarrow -\infty$
 $x \rightarrow \infty$

Answer Key

Practice • Sketching Graphs and Comparing Functions Form A

9A)



9B) is no
0
64

10) positive
negative
positive
negative

11) positive
increasing
negative
decreasing

12) Always
more than once
one
nonlinear

13) Both Linda and Rubio
Both
positive
 $-\infty$
 ∞